

RECAP OF WEEK 4

Put the correct sign ($>$, $<$, $=$)


Greater Than, Less Than, Equal To

Directions: Fill in each circle with the correct sign.

$>$ is greater than



$=$ is equal to



$<$ is less than



$2 \bigcirc 1$

$4 \bigcirc 9$

$3 \bigcirc 3$

$10 \bigcirc 5$

$7 \bigcirc 6$

$8 \bigcirc 2$

$9 \bigcirc 9$

$1 \bigcirc 3$

$2 \bigcirc 1$

$8 \bigcirc 4$

$6 \bigcirc 6$

$7 \bigcirc 10$

WEEK- 5

BETWEEN NUMBERS (1-10)

<https://youtu.be/MUhMFKwiuXI>

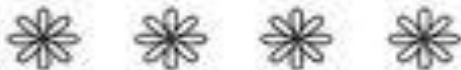
Between Numbers 1-10

Write the numbers that come between the numbers given.

1 _____ 3



6 _____ 8

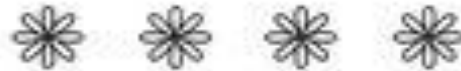


2 _____ 4

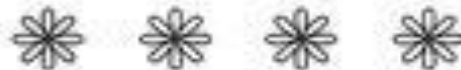


5 _____ 7

7 _____ 9



3 _____ 5



8 _____ 10



4 _____ 6

BETWEEN NUMBERS (10-20)

<https://youtu.be/20hgn7EqRwg>

Between Numbers 10-20

Write the numbers that come between the numbers given.

10 _____ 12



16 _____ 18



12 _____ 14



15 _____ 17

17 _____ 19



13 _____ 15



18 _____ 20



14 _____ 16