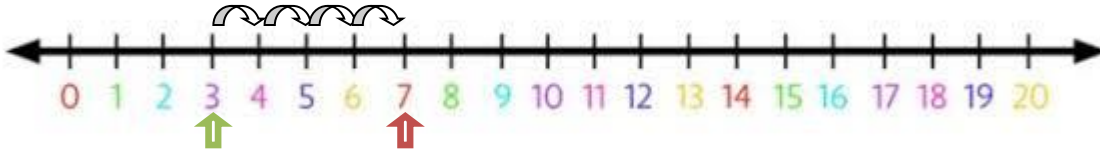


**ADDITION & SUBTRACTION USING NUMBER LINE**

Addition

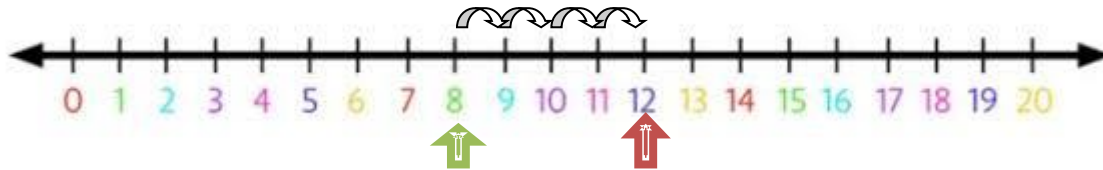
Dear students, we can also carry out addition using the number line to find the sum of  $3 + 4 = ?$



We start at 3 and jump 4 number to the right what number do we get? We get number 7 therefore the sum of  $3 + 4 = 7$

Exercise

1.  $8 + 4 = 12$



2.  $7 + 4 =$  \_\_\_\_\_

3.  $9 + 0 =$  \_\_\_\_\_

4.  $12 + 6 =$  \_\_\_\_\_

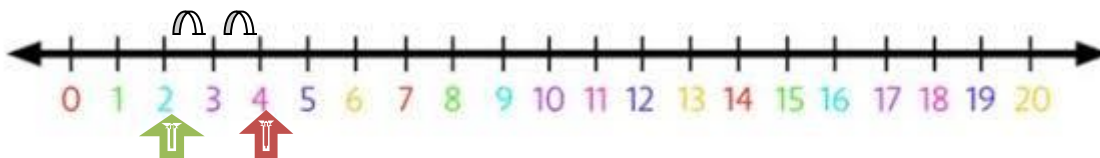
5.  $14 + 2 =$  \_\_\_\_\_

Dear students, solve question no. 2,3,4,5 by using number line.

Subtraction –

$4 - 2 = ?$

We start at 4 and jump 2 number to the left what number do we get? We get number 2 therefore the sum of  $4 - 2 = 2$



1.  $9 - 2 =$  \_\_\_\_\_

2.  $14 - 5 =$  \_\_\_\_\_

3.  $18 - 11 =$  \_\_\_\_\_

4.  $16 - 0 =$  \_\_\_\_\_

5.  $12 - 12 =$  \_\_\_\_\_

Dear students, solve question no.1, 2,3,4,5 by using number line.